


HILLSIDE PRIMARY SCHOOL
SOCIAL STUDIES HALF TERM WORK (SET 5) 2020

Name Stream

SECTION A 40 (MARKS)

1. Mention any one trade item that was introduced in Uganda by the Arabs.
.....
2. What causes days and nights?
.....
3. Give one characteristic of trees in natural forests.
.....
4. Mention any one tax the British introduced in Uganda.
.....
5. How was the church Missionary Society helpful to the early missionaries?
.....
6. Give any one way a basket is important in a home.
.....
7. How was the formation of Lake Albert similar to that of Lake George?
.....
8. State one use of good roads to traders.
.....
9. Name the ethnic group that entered Uganda through North East direction.
.....
10. State one danger of heavy rainfall in hilly areas.
.....
11. Which form of migration involves moving from towns to villages?
.....
12. Why did Apollo Milton Obote abolish all kingdoms in Uganda in 1967?
.....
13. Give any one economic activity carried out in areas with heavy rainfall.
.....
14. Why are industries built in places near raw materials?
.....

15. Draw the tool early man used for skinning animals in the space below.



16. State any one cause of national mourning in a country.

17. Why was Uganda called the "Pearl of Africa" by Winston Churchill?

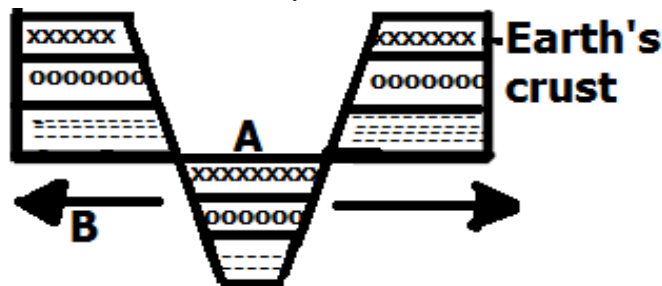
18. What title is given to the head of Central Bank of Uganda?

19. How can one locate places on a map?

20. Give any one reason why the government creates more districts.

21. Why is rice unusually grown in swampy areas?

Use the diagram below to answer questions 23, 24, 25.



22. Mention the physical features marked A.

23. What do we call the forces marked B in the diagram above?

24. Write any one economic activity carried out on physical feature marked A.

25. State any one importance of the Uganda national Anthem.

26. How did the Swahili culture come into existence?

27. Why is 9th October celebrated every year in Uganda?

28. Which type of family has Father, Mother and their biological children only?

29. What role is played by a polling constable at a polling station?

30. Write LEGCO in full.

31. Why is tourism called an industry?

32. Mention any one place where health services are provided

33. State any one danger of living near swamps.

34. Why are children allowed to elect their own leaders at school?

For questions 36-40, answer Either Christianity or Islamic but not both.

35. **Either:** How did Abraham demonstrate His faith in God

Or: How did Ibrahim demonstrate his faith in Allah?

36. **Either:** Who is regarded as the first Martyr in Christianity

Or: Who is regarded as the first Martyr in Islam?

37. **Either:** Why did God send Jesus Christ on earth?

Or: Why did Allah send Prophet Muhammad on earth?

38. **Either:** State any one way Jesus Christ acted as light to the world.

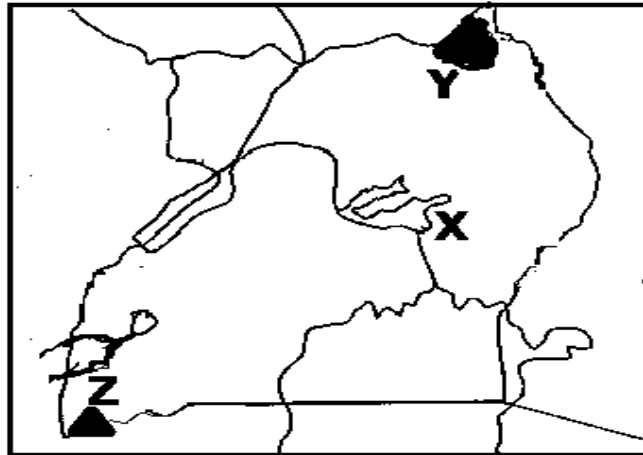
Or: State any one way Prophet Muhammad acted as light to the world.

39. **Either:** Name the Mountain from where Jesus ascended to heaven.

Or: Name the city from where Prophet Muhammad ascended to heaven.

SECTION B (60 MARKS)

40. Use the sketch Map below to answer the questions that follow.



(a) Why is lake marked X swampy?

b) Mention the main tourist attraction in Game Park marked Y.

c) Why do people on the slopes of Mountain Z terrace their land?

d) Use letter M to locate the West Nile Sub - Region on the above map.

41. a) Which Local Council Executive is responsible for children rights?

b) Write down any two forms of child abuse.

(i)

(ii).....

c) Why should children be taught about their rights

42. a) How are the following weather elements important to a farmer?

a) Wind.....

b) Sunshine

c) Give any two ways of promoting good climate in an area

i)

ii)

43. (a) What did the raising of Uganda National Flag on 9th October 1962 mean?

.....

(b) Which colours of the Uganda National Flag stand for the following?

i) Tropical climate

ii) International brotherhood

(c) Mention any one place where the Ugandan National Flag is flown.

.....

44. Complete the table below

TRIBE	ETHNIC GROUP	OCCUPATION
Baganda		
Iteso		Cattle keeping
	Hamites	Cattle keeping

45. How do people use the following resources to earn a living?

(a) Water

.....

(b) Vegetation

.....

(c) Give any two ways man has misused natural resources.

(i)

(ii).....

46. a) Who is an Explorer?

.....

.....

b) How was R. Nile responsible for the coming of most European explorers?

.....

c) Write any two problems faced by explorers in Uganda.

(i)

(ii).....

47. (a) Name the British commissioner that signed the Buganda Agreement.

.....

b) Give any two effects of the 1900 Buganda agreement

(i)

(ii).....

c) Why was the 1900 Buganda agreement signed?

.....

48. (a) How are nimbus clouds helpful to crop farmers?

.....

(b) Mention any two traditional cash crops grown in Uganda

(i)

(ii).....

(c) Why are people encouraged to grow more food crops?

.....

49. Match the following types of transport to their means

- | | |
|------------------------|-----------|
| i) Water transport | Cars |
| ii) Air transport | Train |
| iii) Railway transport | Ferry |
| iv) Road transport | Aeroplane |

(i) Cars

(ii) Train

(iii) Ferry

(iv) Aeroplane

For questions 51 -55, answer either Christianity or Islamic But not both.

50. **EITHER:** a) Mention the miracles Jesus performed at a wedding in Cana.

.....

b) Give any two reasons why Jesus performed miracles.

.....

c) Name any one miracle Jesus performed apart from the one in (a) above.

(i)

(ii).....

OR: (a) Mention the miracle Prophet Muhammad performed at Badr.

.....

(b) Give two reasons why Prophet Muhammad performed miracles.

(i)

(ii)

.....

(c) Name one miracle Muhammad made apart from the one in (a) above.

.....

51. EITHER: a) How did the following people disappoint Jesus Christ?

(i) Simon Peter

.....

(ii) Judas Iscariot

.....

b) Give any two unusual things that happened immediately after the death of Jesus.

(i)

(ii)

.....

OR: a) How were the following related to the life of Prophet Muhammad?

(i) Abu Talib

(ii) Zaid

b) Give two reasons why Pagans from Mecca hated Prophet Muhammad.

(i)

(ii)

.....

52. EITHER: a) Name the country where Israelites suffered as slaves.

.....

b) Who rescued the Israelites from the country above?

.....

(c) Give two ways God helped Israelites during Exodus.

(i)

(ii)

OR: a) Name the country where Ban' Israel suffered as slaves.

b) Who rescued the Ban' Israel from the country above?

c) Give any two ways Allah helped the Ban' Israel during their journey.

(i)

(ii)

53. EITHER: a) Name the material which God used to create Eve.

b) Who was the husband to Eve?

c) State any two reasons why God created man.

(i)

(ii)

OR: Name the material Allah used to create Hawa.

a) Who was the husband of Hawa?

b) State any two reasons why Allah created man.

(i)

(ii)

54. For Both: a) What do we call a person who helps another in times of need?

b) Give any two ways of helping people who are in need.

(i)

(ii)

c) Mention any one group of people who need help from God fearing people.

.....

END